

Geometry Level 1

Summer Packet

This packet of exercises reflects skills that the Math Department considers essential for your success in Geometry!

In this packet you will find the following:

- Questions on material previously learned. (Some material you may not have seen due to adjustments made during virtual learning)
- Topics from Khan Academy referenced in the directions for each problem set. If you are having difficulty recalling how to do a specific type of problem, the Khan Academy videos are an excellent resource for re-teaching. Go to www.khanacademy.org, type in the phrase provided, and it will take you to a video(s) about the topic. Khan Academy also provides further practice on the topics that you can do for your own self-assessment.

Your Responsibility is to:

- DO YOUR BEST to complete all problems and show all necessary work **clearly and carefully**
- Turn in the packet on **THE FIRST DAY OF SCHOOL!** It will be collected and checked for completion on the first day of school.

You will be tested on the material within the first two weeks of school.

Have a great summer!

Assignment

Date _____ Period _____

Solve each equation. (Khan Academy Video: Variables on both sides)

1) $-\frac{3}{2}\left(3v + \frac{5}{2}\right) = -\frac{251}{36} + \frac{1}{3}v$


2) $-\frac{4}{3}\left(-\frac{3}{2}x + \frac{3}{2}\right) - \frac{4}{3} = -3\frac{1}{3}x - \frac{34}{3}$

3) $5(1 + 2k) = 3 + 7(8 + 4k)$


4) $-3x - 2x = 8(4 - 2x) + 8(x - 1)$

Solve each inequality and graph its solution. (Khan Academy Video: Two Step Inequality example)

5) $-190 > -5(8n + 6)$



6) $-6(-3 - 5x) < 228$



Solve each proportion. (Khan Academy Video: Proportions 2)

7) $\frac{8}{b-1} = \frac{11}{b+2}$

8) $-\frac{5}{11} = \frac{5b-4}{2b+12}$

Solve each system by substitution.(Khan Academy Topic: Solving Linear Systems by Substitution)

9) $4x + y = 4$
 $-3x - 2y = 7$

10) $2x - 8y = 12$
 $-3x - 2y = 24$

Solve each system by elimination.(Khan Academy Topic: Solving Linear Systems by elimination and Solving Linear Systems by Multiplication)

11) $6x + 4y = 18$
 $-6x - 3y = -18$

12) $3x - 2y = -11$
 $5x - 3y = -20$

Simplify.(Khan Academy Topic: Simplifying radicals)

13) $\sqrt{108}$

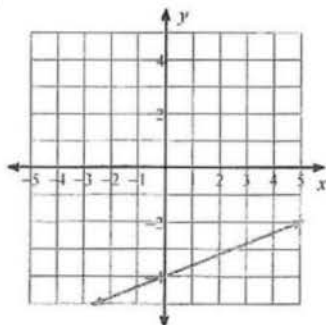
14) $\sqrt{8}$

15) $3\sqrt{32}$

16) $4\sqrt{112}$

Write the slope-intercept form of the equation of each line given the information provided.(Khan Academy Topic: Constructing equations in slope intercept form - there are multiple videos on this topic, Also see equations of parallel and perpendicular lines)

17)



18) $4x + 3y = 22$

19) $y - 3 = 3(x - 4)$

20) Slope = $-\frac{1}{2}$, y-intercept = -1

21) through: $(3, -1)$, slope = $-\frac{2}{3}$


22) through: $(-5, 2)$ and $(4, -4)$

23) through: $(-1, 4)$, parallel to $y = -2x - 5$


24) through: $(1, -1)$, perp. to $y = \frac{1}{4}x + 4$

Sketch the graph of each line. (Khan Academy Topic: Graphing linear equations in slope intercept form)

25) $3x + y = -4$



26) $x = 4$



Simplify each expression. (Khan Academy Topic: Addition and subtraction of polynomials)

27) $-3(b - 3) + 3(4b + 3)$

28) $7(6r + 8) - 5(1 + 8r)$

Factor each completely. (Khan Academy Topic: Factoring Quadratics)

29) $a^2 - 7a + 10$

30) $5x^2 + 100x + 500$

31) $4x^3 - 44x^2 + 112x$

32) $3a^3 - 27a$

33) $5n^2 + 17n + 6$

Solve each equation by factoring. (Khan Academy Topic: Solving a quadratic equation by factoring)

34) $v^2 = 14 - 5v$

35) $x^2 = 9$

36) $x^2 = -24 - 11x$

37) $b^2 = 4b$

Evaluate each function. (Khan Academy Video: Evaluating with function notation)

38) $p(t) = 2t + 4$; Find $p(2)$

39) $p(n) = -n^2 + 5n$; Find $p(-3)$

40) $p(x) = x^2 + 5$; Find $p(-5)$

Evaluate each expression. (Khan Academy Video: Adding and subtracting fractions)

41) $1\frac{2}{3} + \left(-1\frac{6}{7}\right) + 3 + 2$

42) $2\frac{1}{4} - \frac{1}{4} + \left(-2\frac{5}{6}\right) + 3\frac{1}{4}$

Find each quotient. (Khan Academy Video: Multiplying and dividing fractions)

43) $\frac{3\frac{3}{4}}{\frac{4}{5}}$

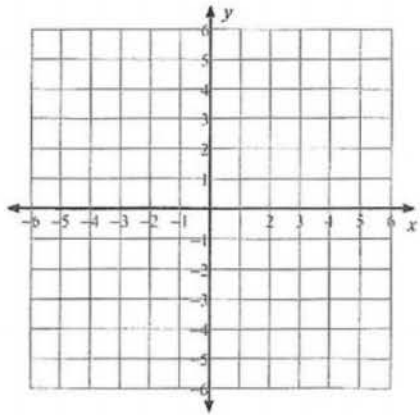
44) $\frac{-2}{\frac{1}{4}}$

Evaluate each using the values given. (Khan Academy Video: Evaluating expressions in one variable)


45) $yx - x - (x^2 + y)$; use $x = -3$, and $y = -13$

Sketch the graph of each line. (Khan Academy Topic: Graphing Linear Equations)

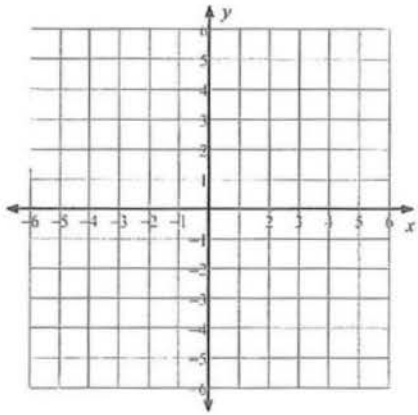
46) $y = -\frac{3}{5}x - 4$



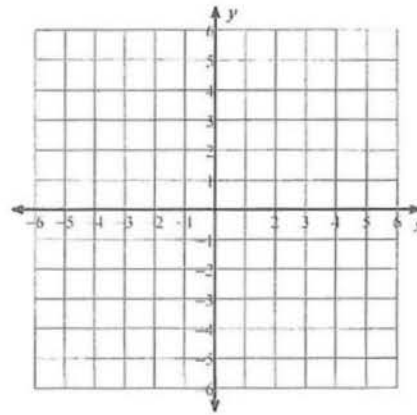
47) $4x - 3y = 6$



48) x -intercept = -4 , y -intercept = 2

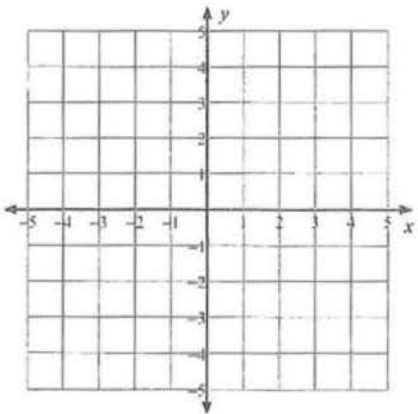


49) $10y - 4x - 10 = 0$

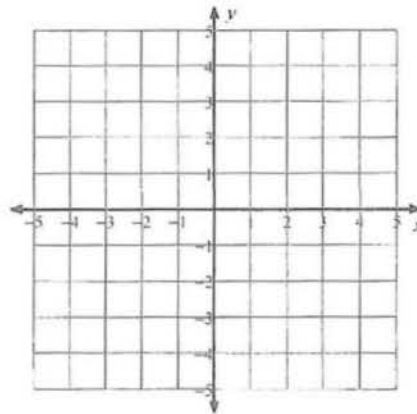


Solve each system by graphing. (Khan Academy Topic: Graphing Systems of Equations)

50) $y = x - 4$
 $y = -\frac{5}{2}x + 3$



51) $y = \frac{1}{4}x + 4$
 $y = -\frac{3}{2}x - 3$



Find each product. (Khan Academy Topic: Multiplying Polynomials)

52) $(x + 2)(4x + 5)$

53) $(7b + 4)(5b - 2)$

54) $(7r - 3)(2r + 3)$

55) $(4n - 1)(8n - 6)$

56) $(3v - 7)(v + 2)$

57) $(3x + 6)(2x + 6)$

58) $(2n + 7)(8n^2 + 6n - 1)$

59) $(4b - 5)(5b^2 - 8b - 1)$

Simplify. Your answer should contain only positive exponents.

60)
$$\frac{(ab^0)^{-3} \cdot (a^{-3}b^{-1})^{-4}}{2ba^{-3}}$$

61)
$$\frac{2xy^{-2} \cdot (2x^3y^3)^3}{x^{-1}}$$

62)
$$\frac{y^4 \cdot x^{-4}y^0}{(x^2y^3)^{-4}}$$

63)
$$\frac{(u^{-2} \cdot u^{-3}v^{-4})^4}{2uv^{-2}}$$

64)
$$\frac{(y^4)^2 \cdot x^2}{2xy^3}$$

65)
$$\frac{2u}{2vu^4 \cdot (2u^{-3}v^3)^{-4}}$$